




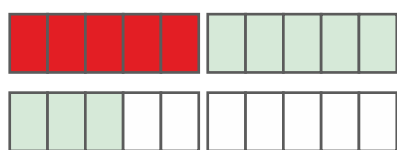
Addition up to 20

Calculate step by step over the tens.



$$6 + 5 = 11$$

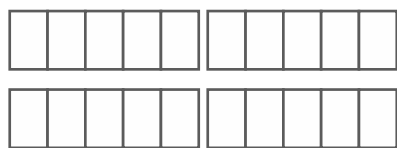
$$6 + 4 + 1 =$$

$$10 + 1 = 11$$


$$5 + 8 = \square$$

$$\square + \square + \square =$$

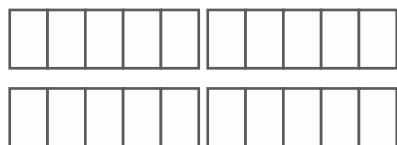
$$\square + \square = \square$$



$$7 + 7 = \square$$

$$\square + \square + \square =$$

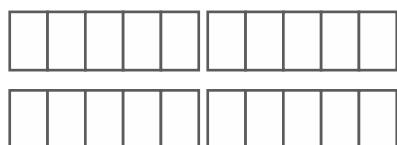
$$\square + \square = \square$$



$$8 + 3 = \square$$

$$\square + \square + \square =$$

$$\square + \square = \square$$



$$9 + 6 = \square$$

$$\square + \square + \square =$$

$$\square + \square = \square$$