


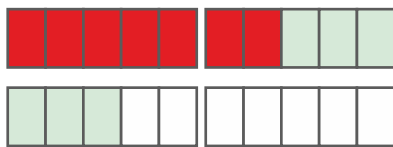


Addition up to 20

Calculate step by step over the tens.



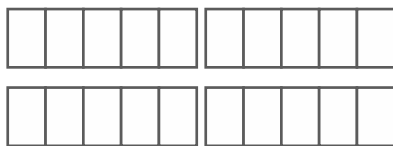
$9 + 6 = 15$
 $9 + 1 + 5 =$
 $10 + 5 = 15$



$$7 + 6 = \square$$

$$\square + \square + \square =$$

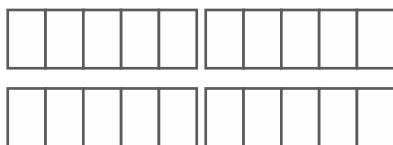
$$\square + \square = \square$$



$$5 + 9 = \square$$

$$\square + \square + \square =$$

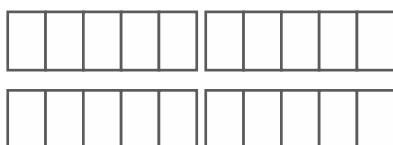
$$\square + \square = \square$$



$$4 + 8 = \square$$

$$\square + \square + \square =$$

$$\square + \square = \square$$



$$5 + 8 = \square$$

$$\square + \square + \square =$$

$$\square + \square = \square$$