














Always Ten



Two numbers that always add up to 10.

Fill in the missing numbers.

0	1	<input type="text"/>	3	4	<input type="text"/>	6	<input type="text"/>	8	9	<input type="text"/>
										
10	<input type="text"/>	8	<input type="text"/>	<input type="text"/>	5	4	3	<input type="text"/>	1	0

Which numbers always add up to 10? Connect them with a line.

